

# lesson 19

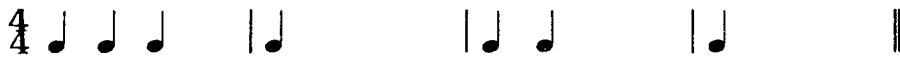
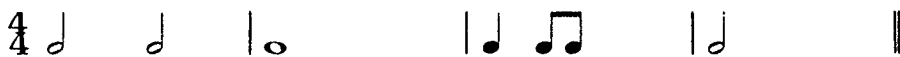
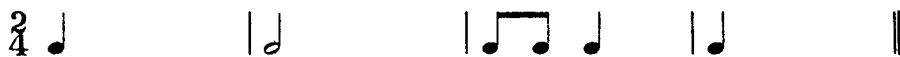
## NOTE AND REST REVIEW

Add the notes of the proper value to complete these measures:

Example:



This measure has only one half note, worth two counts. Since it is 4/4 time, the measure should have four counts. Add two counts to complete the measure.



.....  
Add the rests of the proper value to complete these measures:

